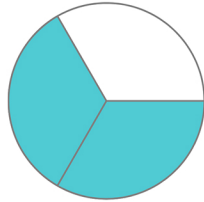


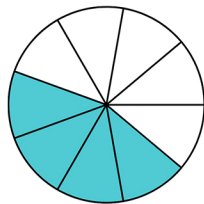
MATCHING ACTIVITY

DECIMALS AND THEIR EQUIVALENT FRACTIONS

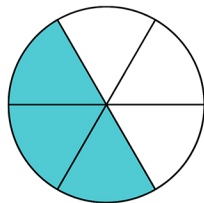
Draw a line between the matching fractions.



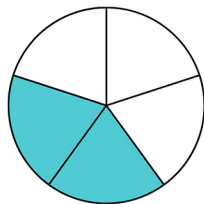
$$2/5$$



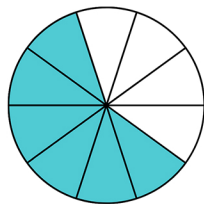
$$3/5$$



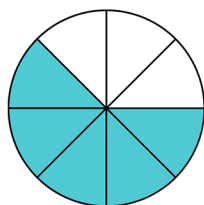
$$5/8$$



$$4/9$$



$$2/3$$



$$1/2$$